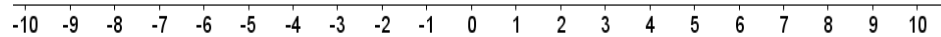


Gníomhaíocht Daltaí: Éagothromóidí bunúsacha a iniúchadh

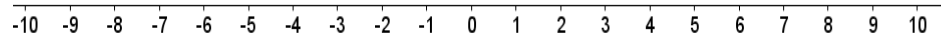
Déan in éineacht leis an gcomhad idirghníomhach ‘Éagothromóidí’, ar CD an Dalta.

1. Léirigh na héagothromóidí seo a leanas ar na huimhirlínte thíos:

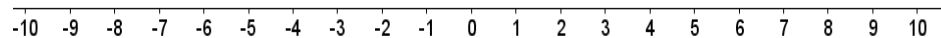
a. $x < 2, x \in \mathbb{R}$.



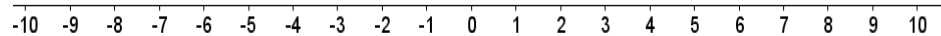
b. $x > 3, x \in \mathbb{R}$.



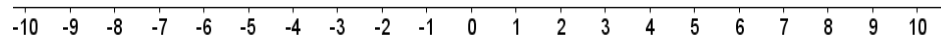
c. $x \leq 4, x \in \mathbb{R}$.



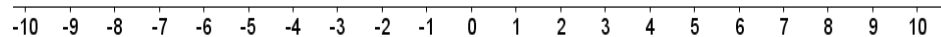
d. $x \geq 5, x \in \mathbb{R}$.



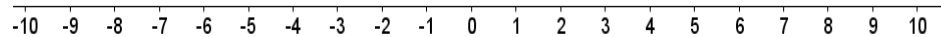
e. $x \leq 2, x \in \mathbb{R}$.



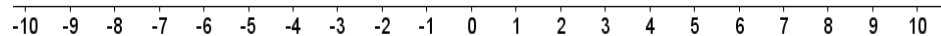
f. $x > 0, x \in \mathbb{R}$.



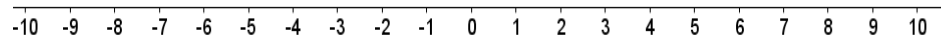
g. $x < 0, x \in \mathbb{R}$.



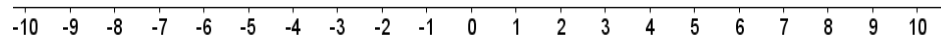
h. $x > -2, x \in \mathbb{R}$.



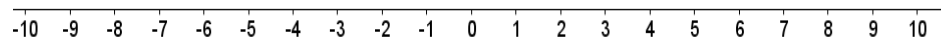
i. $x < -4, x \in \mathbb{R}$.



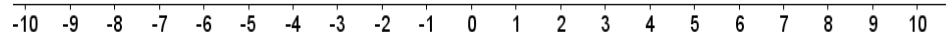
j. $x \geq -2, x \in \mathbb{R}$.



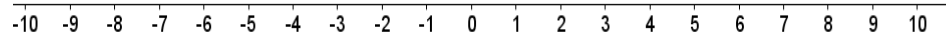
k. $x \leq -1, x \in \mathbb{R}$.



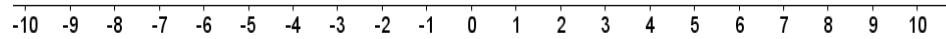
l. $x < 2, x \in \mathbb{Z}$. (Ní $x \in \mathbb{R}$ atá i gceist anseo.)



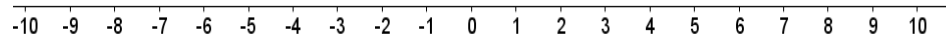
m. $x > 3$, $x \in \mathbb{N}$. (Ní $x \in \mathbb{R}$ atá i gceist anseo.)



n. $x \leq 4$, $x \in \mathbb{N}$. (Ní $x \in \mathbb{R}$ atá i gceist anseo.)

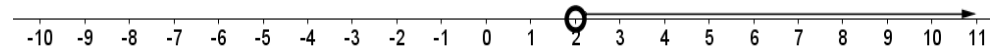


o. $x \geq 5$, $x \in \mathbb{Z}$. (Ní $x \in \mathbb{R}$ atá i gceist anseo.)

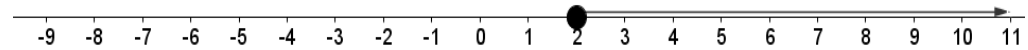


2. Abair cén éagothromóid atá á léiriú ar gach uimhirlíne thíos, má tá $x \in \mathbb{R}$.

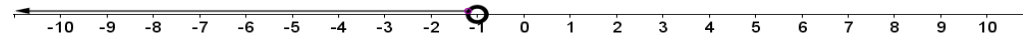
a.



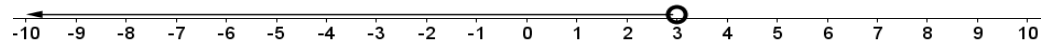
b.



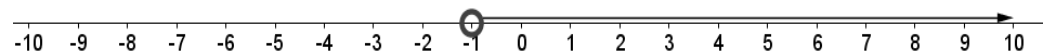
c.



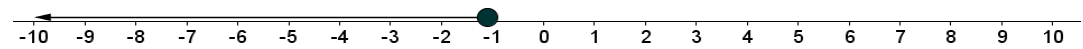
d.



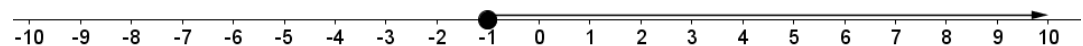
e.



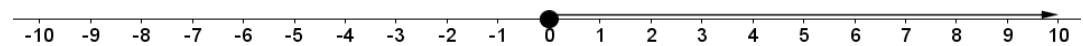
f.



g.



h.



i.

