

Gníomhaíocht Daltaí 7d

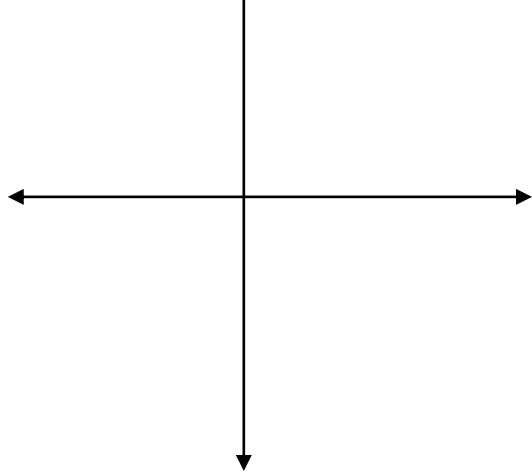
Oibrigí i mbeirteanna, chun na graif thíos a sceitseáil ar na haiseanna.

Is fiú a bheith cúramach leis na hidirlínte, agus a nótáil más uasluch logánta nó íosluch logánta atá i mbuaic an ghraif.

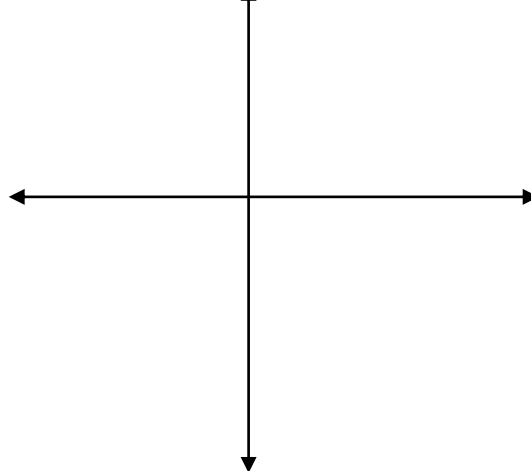
Is féidir na freagraí a fhíorú le háireamhán grafála nó le bogearra grafála ar nós GeoGebra.

Mura bhfuil fáil ar a leithéidi, is féidir pointí a fhíorú le “Mode” -> “Table” ar an áireamán.

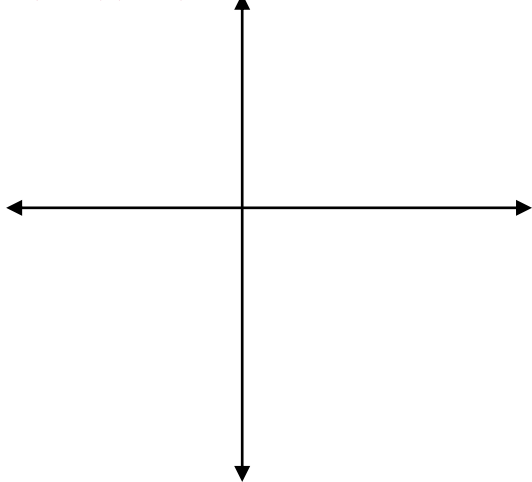
$$y = (x+2)(x-3)(x+1)$$



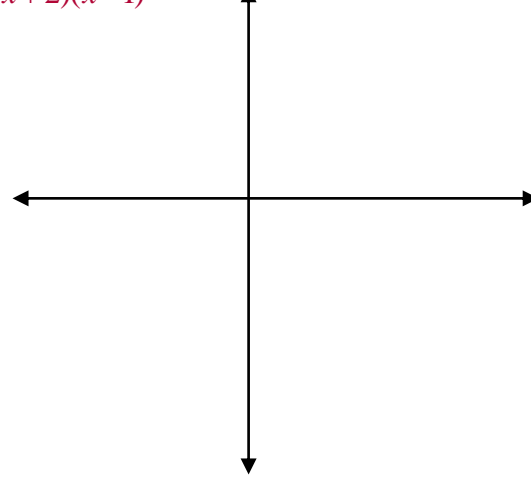
$$y = -(x+2)(x-3)(x+1)$$



$$y = x(x-2)(x-3)$$

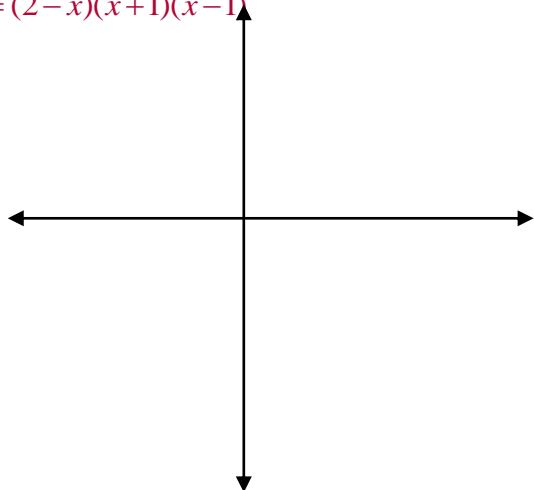


$$y = (x+2)(x-1)^2$$

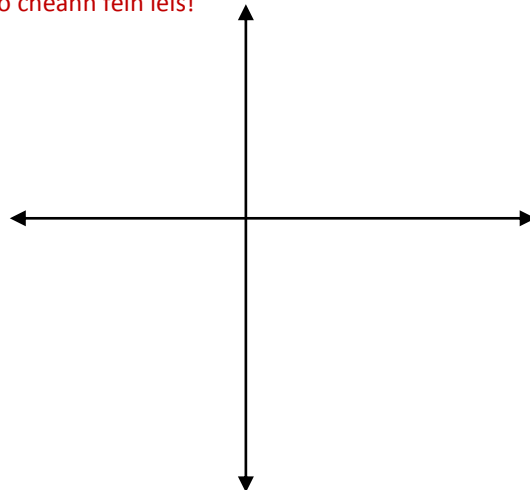


Gníomhaíocht Daltaí 7d

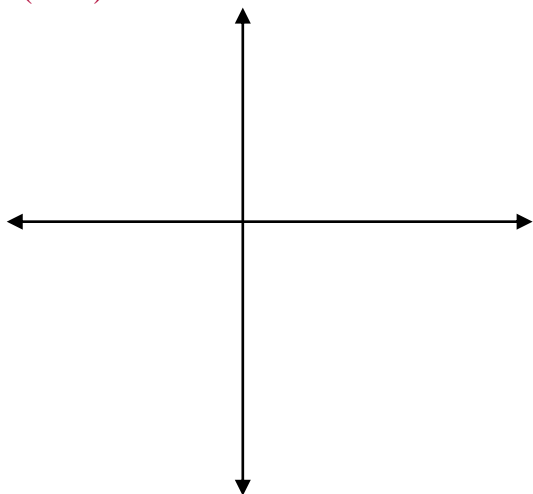
$$y = (2-x)(x+1)(x-1)$$



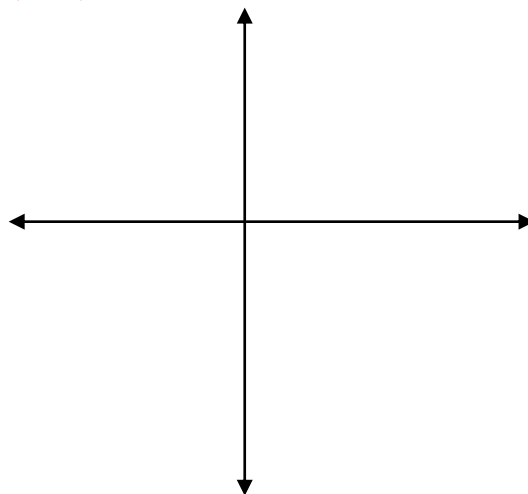
Cuir do cheann féin leis!



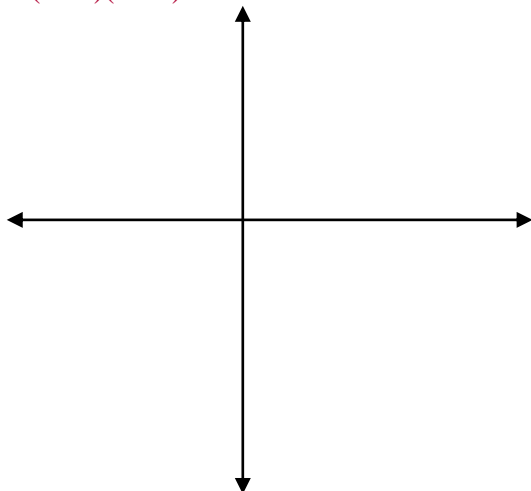
$$y = (x-4)^3$$



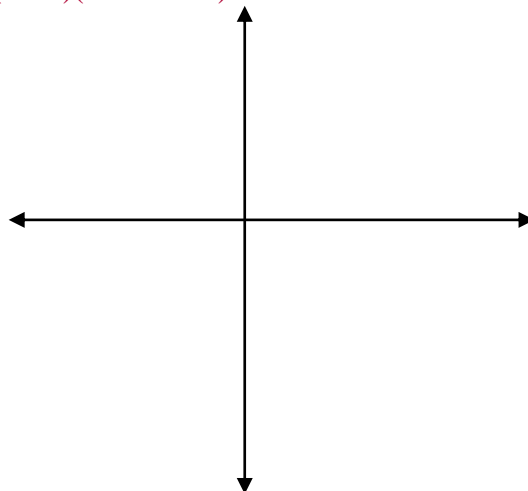
$$y = -(x-4)^3$$



$$y = (1-x)(x-3)^2$$

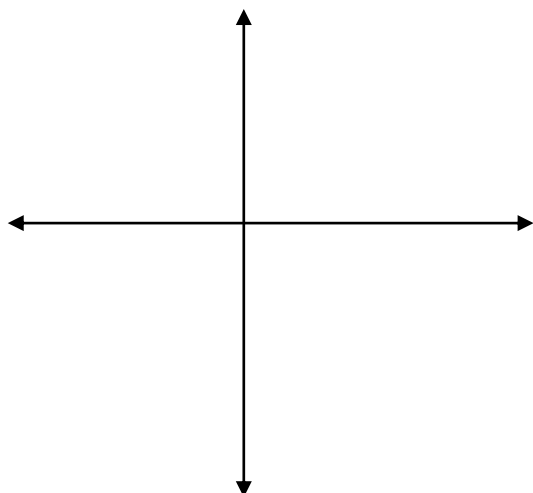


$$y = (x+2)(x^2 - 4x + 5)$$



Gníomhaíocht Daltaí 7d

Cuir do cheann féin leis!



Cuir do cheann féin leis!

